

Johann J. Petersen

# Kom og Rokna

Til: jólamannin

Jóla-  
rokning

NAVN:





Hesa bók eigur:

Kom og rokna  
Jólarokning 1

© NÁM 2023  
© Johann J. Petersen

Skrivað, snið og uppseting: Johann J. Petersen

NÁM

2



# Hvussu eita Skapini?



**Sirkul**



**Fýrakantur**



**Tríkantur**



**Trapets**



**Parallelogramm**



**Fimmkantur**



**Stjørna**



**Hjarta**




**Romba**



1

Hvussu nógvir jólamenn?



2

Hvat kosta lutirnir?

$$\text{star} + \text{ball} = \underline{\hspace{2cm}} \text{ kr}$$

$$\text{candy} + \text{lamp} = \underline{\hspace{2cm}} \text{ kr}$$

$$\text{ball} + \text{bow} = \underline{\hspace{2cm}} \text{ kr}$$



$$\text{gift} + \text{ball} + \text{lamp} = \underline{\hspace{2cm}} \text{ kr}$$

$$\text{bow} + \text{ball} + \text{star} = \underline{\hspace{2cm}}$$

$$\text{star} + \text{star} + \text{star} = \underline{\hspace{2cm}} \text{ kr}$$

$$\text{lamp} + \text{gift} + \text{candy} = \underline{\hspace{2cm}}$$

4




3

Set striku ímillum somu mongdär



4

Finn fimm feilir



5


5

Plusspyramidan



6

Tekna jólamann



6



7

Hvörjir eru 10-talsvinirnir?

|                |                |                |                |                |
|----------------|----------------|----------------|----------------|----------------|
| $10$           | $10$           | $10$           | $10$           | $10$           |
| $4 + \bigcirc$ | $\bigcirc + 5$ | $1 + \bigcirc$ | $3 + \bigcirc$ | $9 + \bigcirc$ |
| $10$           | $10$           | $10$           | $10$           | $10$           |
| $5 + \bigcirc$ | $2 + \bigcirc$ | $\bigcirc + 2$ | $\bigcirc + 4$ | $\bigcirc + 7$ |

8

Set tekstin og roknistykkið saman

Jólamaðurin gav 12 gávur til Jónas, 10 gávur til Lilju, og 15 gávur til Henrik.

Julia bakaði 24 jólasmaakokur. Julius át 12 av jólasmaakokunum, ið Julia hevði bakað.

Aura pakkaði 3 gávur upp jólaaftan, 4 gávur upp jóladag og 5 gávur 2. jóladag.

Set átti 22 jólastavar. Systur hansara át 10 jólastavar og pápin át 8.

$$3 + 4 + 5 = 12$$

$$12 + 10 + 15 = 27$$

$$22 - 10 - 8 = 4$$

$$24 - 12 = 12$$



7



9

Legg saman og drag frá

$12 + 12 = \underline{\quad}$

$25 - 9 = \underline{\quad}$

$20 - 14 = \underline{\quad}$

$19 - 7 = \underline{\quad}$

$25 + 10 = \underline{\quad}$

$15 - 11 = \underline{\quad}$


$18 + 8 = \underline{\quad}$

$21 - 8 = \underline{\quad}$

$14 + 8 = \underline{\quad}$

10

Hvør eigur hvørja gávu?



11

Hvussu nógv kosta ísamir?





12

1, 10 og 100 stærri

stærri

10

1

11

stærri

64

10

74

stærri

125

100

225

stærri

51

1

stærri

74

10

stærri

245

100

stærri

28

1

stærri

152

10

stærri

456

100

stærri

49

1

stærri

170

10

stærri

15

100

13

Ger plussstykki og legg saman

Rudolf át 34 gularøtur í gjár. Í dag át hann 40 gularøtur. Hvussu nógvur gularøtur át Rudolf tilsamans?

Kavamaðurin Julius átti 56 kavabóltar. Kavamaðurin Augustus átti 76 kavabóltar. Hvussu nógvur kavabóltar áttu teir tilsamans?

|   |  |  |
|---|--|--|
|   |  |  |
|   |  |  |
|   |  |  |
| + |  |  |
|   |  |  |



|   |  |  |
|---|--|--|
|   |  |  |
|   |  |  |
|   |  |  |
| + |  |  |
|   |  |  |

14

Skriva roknisögu




---



---



---



---



---



---



---



---



---



---

15

100, 10 og 1 kr. legg saman

$$\begin{array}{c} 100\text{kr.} \\ 100\text{kr.} \end{array} + \begin{array}{c} 10 \\ 10 \\ 10 \end{array} + \begin{array}{c} 1\text{kr} \\ 1\text{kr} \\ 1\text{kr} \end{array} = \underline{\hspace{2cm}} \text{kr}$$

$$\begin{array}{c} 100\text{kr.} \\ 100\text{kr.} \\ 100\text{kr.} \end{array} + \begin{array}{c} 100\text{kr.} \\ 10 \end{array} + \begin{array}{c} 1\text{kr} \\ 1\text{kr} \\ 1\text{kr} \end{array} = \underline{\hspace{2cm}} \text{kr}$$

$$100\text{kr.} + 100\text{kr.} + \begin{array}{c} 10\text{kr} \\ 1\text{kr} \\ 1\text{kr} \\ 1\text{kr} \end{array} = \underline{\hspace{2cm}} \text{kr}$$

$$\begin{array}{c} 100\text{kr.} \\ 100\text{kr.} \end{array} + \begin{array}{c} 100\text{kr.} \\ 10 \end{array} + \begin{array}{c} 1\text{kr} \\ 1\text{kr} \\ 1\text{kr} \\ 1\text{kr} \end{array} = \underline{\hspace{2cm}} \text{kr}$$

$$\begin{array}{c} 100\text{kr.} \\ 100\text{kr.} \end{array} + \begin{array}{c} 100\text{kr.} \\ 10 \end{array} + \begin{array}{c} 1\text{kr} \\ 1\text{kr} \\ 1\text{kr} \\ 1\text{kr} \end{array} = \underline{\hspace{2cm}} \text{kr}$$

16

Hvussu nógvir pengar í part?


 kr.


 kr.

 kr.



17


Hvussu nógvar puntar fylir skapið?



=      puntar

=      puntar

=      puntar



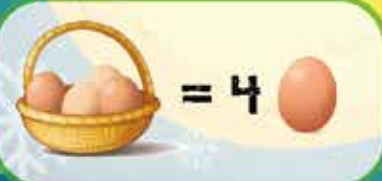
=      puntar

=      puntar

=      puntar

18

Hvussu nógv egg?





19

Hvussu nógvir pengar í part?

\_\_\_\_\_ kr.

\_\_\_\_\_ kr.

\_\_\_\_\_ kr.

\_\_\_\_\_ kr.

\_\_\_\_\_ kr.

20

Hjálpteimum á mál

Kertustubbi

Greytasleikur

Kjotkrókur

Halaleysi

12



21

Hvussu nógv kosta pløggini?



kr



kr



kr



22

Hvørji tøl, ella tekn mangla?

$12 + 13 = \square$

$19 - 11 = \square$

$12 + 31 = \square$

$28 - 16 = \square$

$15 \square 15 = 30$

$25 - 11 = \square$

$24 \square 10 = 14$

$25 + \square = 32$

$16 - 16 = \square$

$\square - 15 = 40$

$13 + \square = 27$

$45 \square 15 = 30$

23

Hvat er dupult so nógv?

16



8



14



15



22



25



43

24

Drag frá

$14 - 14 = \underline{\quad}$

$31 - 12 = \underline{\quad}$

$30 - 25 = \underline{\quad}$

$24 - 12 = \underline{\quad}$

$31 - 20 = \underline{\quad}$

$45 - 21 = \underline{\quad}$



$20 - 7 = \underline{\quad}$

$18 - 8 = \underline{\quad}$

$25 - 8 = \underline{\quad}$

25

Veksla



26

Hvat kosta lutimir?

$\text{Wreath} + \text{Santa hat} = \underline{\quad} \text{ kr}$

$\text{Green ornament} + \text{Bells} = \underline{\quad} \text{ kr}$

$\text{Candy cane} + \text{Bells} + \text{Wreath} = \underline{\quad} \text{ kr}$

$\text{Sled} + \text{Candy cane} + \text{Bells} = \underline{\quad} \text{ kr}$



$\text{Wreath} + \text{Green ornament} + \text{Santa hat} = \underline{\quad} \text{ kr}$

$\text{Candy cane} + \text{Santa hat} + \text{Green ornament} = \underline{\quad} \text{ kr}$



27

Set tekstin og roknistykki saman

Sasja bakaði 4 smákøkur  
hvønn dag í 4 dagar

Mika hevði 16 kr. við sær til  
handils og brúkti 4 kr.

Milo átti 7 kr. og Adrian átti  
8 kr.

$$16 - 4 = 12$$

$$4 + 4 + 4 + 4 = 16$$

$$7 + 8 = 15$$

28

Finn fimm feilir



15



29

Hvat er rætt?

$18 + 6$

$40 - 15$

$31 - 7$

$5 + 8$

$= 24$

$27 - 6$

$12 + 12$

$35 - 12$

$16 + 8$

30

Hvussu nógvar gávur?



31

Halt fram við mynstrinum





32

Hvørji eru 10-talsvinirnir?

$10$   
 $\bigcirc + 6$

$10$   
 $1 + \bigcirc$

$10$   
 $5 + \bigcirc$

$10$   
 $\bigcirc + 8$



33

Ger tíni egnu rokniestykkir

|  |  |
|--|--|
| $\underline{\quad} - \underline{\quad} + \underline{\quad} = 10$ | $\underline{\quad} - \underline{\quad} - \underline{\quad} = 8$  |
| $\underline{\quad} + \underline{\quad} - \underline{\quad} = 22$ | $\underline{\quad} + \underline{\quad} + \underline{\quad} = 45$ |
| $\underline{\quad} - \underline{\quad} - \underline{\quad} = 24$ | $\underline{\quad} - \underline{\quad} + \underline{\quad} = 24$ |
| $\underline{\quad} + \underline{\quad} - \underline{\quad} = 30$ | $\underline{\quad} + \underline{\quad} + \underline{\quad} = 5$  |
| $\underline{\quad} + \underline{\quad} + \underline{\quad} = 42$ | $\underline{\quad} - \underline{\quad} - \underline{\quad} = 14$ |

34

Hvat kosta jólakøkurnar?

$\text{kr}$

$\text{kr}$

$\text{kr}$

$\text{kr}$

$\text{kr}$

4 smákøkur



20 kr

3 smákøkur



12 kr



50 kr



25 kr



35

Hvat er rætt?

$22 + 11$



$41 - 8$



$40 - 12$



$= 34$

$15 + 19$



$50 - 17$



$24 + 12$



$48 - 14$



$18 + 18$



36

Veksla

100 kr



100 kr



37

Legg saman

 +  = \_\_\_\_\_ kr

 +  = \_\_\_\_\_ kr

 +  +  = \_\_\_\_\_ kr

 +  +  = \_\_\_\_\_ kr

 +  +  = \_\_\_\_\_ kr

 +  +  = \_\_\_\_\_ kr



38

Legg saman

|   |   |   |
|---|---|---|
|   |   |   |
| 5 | 1 | 0 |
| + | 2 | 7 |
| 3 |   |   |

|   |   |   |
|---|---|---|
|   |   |   |
| 5 | 5 | 0 |
| + | 3 | 2 |
| 9 |   |   |

|   |   |   |
|---|---|---|
|   |   |   |
| 7 | 5 | 0 |
| + | 1 | 9 |
| 8 |   |   |

|   |   |   |
|---|---|---|
|   |   |   |
| 4 | 6 | 7 |
| + | 7 | 4 |
| 6 |   |   |

|   |   |   |
|---|---|---|
|   |   |   |
| 9 | 6 | 9 |
| + | 3 | 2 |
| 1 |   |   |

|   |   |   |
|---|---|---|
|   |   |   |
| 5 | 7 | 9 |
| + | 4 | 3 |
| 0 |   |   |

|   |   |   |
|---|---|---|
|   |   |   |
| 4 | 2 | 9 |
| + | 6 | 9 |
| 3 |   |   |

|   |   |   |
|---|---|---|
|   |   |   |
| 2 | 3 | 9 |
| + | 4 | 6 |
| 2 |   |   |

|   |   |   |
|---|---|---|
|   |   |   |
| 5 | 0 | 5 |
| + | 3 | 6 |
| 3 |   |   |




39


Hvussu nógvar puntar?



=      puntar



=      puntar



=      puntar



=      puntar



=      puntar



=      puntar





Jóla-  
rokning

